



zoek het ontbrekende getal (puntoef. + zb)

W11


ict-coördinator Jo David

$10 + 2 =$ 


14

$10 + 6 =$ 


17

$10 + 3 =$ 


16

$10 + 9 =$ 


13

$10 + 7 =$ 


18

$10 + 10 =$ 


11

$10 + 1 =$ 

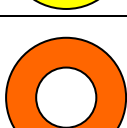
20

$10 + 5 =$ 










15

$10 + 8 =$ 

19

$10 + 4 =$ 

12

zoek het ontbrekende getal (puntoef. + zb)	W11 ict-coördinator Jo david
$10 + 4 = 14$	
$10 + 7 = 17$	
$10 + 6 = 16$	
$10 + 3 = 13$	
$10 + 8 = 18$	
$10 + 1 = 11$	
$10 + 10 = 20$	
$10 + 5 = 15$	
$10 + 9 = 19$	
$10 + 2 = 12$	