

zoek het ontbrekende getal (puntoef. + zb)

W2

ict-coördinator Jo David

$$9 = \text{red circle} + 5$$

9

$$9 = \text{blue circle} + 0$$

1

$$9 = 3 + \text{green circle}$$

3

$$9 = 2 + \text{yellow circle}$$

4

$$1 + \text{orange circle} = 9$$

5

$$7 + \text{red ring} = 9$$

6

$$8 + \text{blue ring} = 9$$

2

$$9 + \text{green ring} = 9$$








7

$$9 = \text{yellow ring} + 6$$

8

$$9 = \text{orange ring} + 4$$

0

zoek het ontbrekende getal (puntoef. + zb)	W2	ict-coördinator Jo david
	$9 = 9 + 0$	
	$8 + 1 = 9$	
	$9 = 3 + 6$	
	$9 = 4 + 5$	
	$9 = 5 + 4$	
	$9 = 3 + 6$	
	$7 = 2 + 9$	
	$9 = 2 + 7$	
	$1 + 8 = 9$	
	$9 + 0 = 9$	