

zoek het ontbrekende getal (puntoef. - zb)

**W4**

ict-coördinator Jo David

$$9 - 8 = \text{●}$$

**3**

$$7 - 2 = \text{●}$$

**8**

$$\text{●} = 6 - 3$$

**1**

$$8 - 4 = \text{●}$$

**0**

$$\text{●} = 9 - 0$$

**5**

$$9 - 1 = \text{○}$$

**4**

$$8 - 2 = \text{○}$$

**7**

$$\text{○} = 5 - 3$$

**6**

$$\text{○} = 0 - 0$$

**9**

$$9 - 2 = \text{○}$$


**2**

zoek het ontbrekende getal (puntoef. - zb)

W4

ict-coördinator  
Jo david


$$1 = 9 - 8$$




$$9 - 5 = 4$$




$$9 = 9 - 0$$




$$0 = 9 - 9$$



$$9 - 7 = 2$$




$$9 - 1 = 8$$




$$9 - 6 = 3$$



$$5 = 9 - 4$$



$$7 = 9 - 2$$



$$9 - 3 = 6$$

