

maak de rekensommen (+ zonder brug)

W5

ict-coördinator Jo David

$0 + 4 = \text{●}$

9

$2 + 3 = \text{●}$

1

$1 + 6 = \text{●}$

3

$3 + 6 = \text{●}$

4

$4 + 4 = \text{●}$

5

$1 + 0 = \text{○}$

6

$1 + 1 = \text{○}$

2

$2 + 1 = \text{○}$

7

$3 + 3 = \text{○}$

8

$0 + 0 = \text{○}$


0

maak de rekensommen (+ zonder brug)


W5

ict-coördinator
Jo david


$$3 + 6 = 9$$



$$1 + 6 = 7$$




$$1 + 1 = 2$$




$$0 + 0 = 0$$



$$0 + 4 = 4$$




$$4 + 4 = 8$$



$$2 + 3 = 5$$



$$2 + 1 = 3$$



$$1 + 0 = 1$$



$$3 + 3 = 6$$

