










zoek het ontbrekende getal (puntoef. + zb)	W6	ict-coördinator Jo David
$8 - 2 = \bullet$		1
$\bullet = 5 + 2$		3
$6 - 5 = \bullet$		6
$2 + 3 = \bullet$		8
$4 + 5 = \bullet$		4
$\bigcirc = 7 - 5$		7
$9 - 6 = \bigcirc$		2
$\bigcirc = 4 - 4$		5
$8 - 4 = \bigcirc$		0
$\bigcirc = 4 + 4$		9

zoek het ontbrekende getal (puntoef. + zb)	W6 ict-coördinator Jo david
$6 - 5 = 1$	
$9 - 6 = 3$	
$8 - 2 = 6$	
$8 = 4 + 4$	
$8 - 4 = 4$	
$7 = 5 + 2$	
$2 = 7 - 5$	
$2 + 3 = 5$	
$0 = 4 - 4$	
$4 + 5 = 9$	