










maak de rekensommen (minoefenigen zonder brug) W8	ict-coördinator Jo David
$15 - 10 =$ ●	5
$15 - 1 =$ ●	15
$15 - 11 =$ ●	4
$15 - 3 =$ ●	13
$15 - 13 =$ ●	14
$15 - 0 =$ ○	3
$15 - 5 =$ ○	12
$15 - 15 =$ ○	2
$15 - 2 =$ ○	0
$15 - 12 =$ ○	10

maak de rekensommen (minoefenigen zonder brug)	W8 ict-coördinator Jo david
$15 - 10 = 5$	
$15 - 0 = 15$	
$15 - 11 = 4$	
$15 - 2 = 13$	
$15 - 1 = 14$	
$15 - 12 = 3$	
$15 - 3 = 12$	
$15 - 13 = 2$	
$15 - 15 = 0$	
$15 - 5 = 10$	