

maak de rekensommen (minoefenigen zonder brug) **W9**

ict-coördinator Jo David

$16 - 10 = \text{●}$

5

$16 - 1 = \text{●}$

16

$16 - 11 = \text{●}$

6

$16 - 3 = \text{●}$

10

$16 - 13 = \text{●}$

15

$16 - 0 = \text{○}$

0

$16 - 5 = \text{○}$

13

$16 - 15 = \text{○}$






3

$16 - 6 = \text{○}$

1

$16 - 16 = \text{○}$

11

maak de rekensommen (minoefenigen zonder brug)	W9 ict-coördinator Jo david
$16 - 11 = 5$	
$16 - 0 = 16$	
$16 - 10 = 6$	
$16 - 6 = 10$	
$16 - 1 = 15$	
$16 - 16 = 0$	
$16 - 3 = 13$	
$16 - 13 = 3$	
$16 - 15 = 1$	
$16 - 5 = 11$	